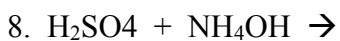
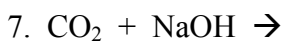
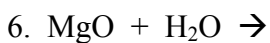
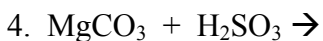
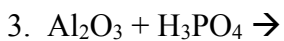
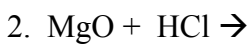


Predict the products and balance the following equations.



Write the complete, ionic, and net ionic equation for the neutralization reaction between nitrous acid and lithium hydroxide.

For the following incomplete reaction:



How many grams of zinc chloride would be produced if 100. mL of 2.3 M HCl reacted with an excess of zinc?